

North South or West 2017

1. Henry Clay represents what section?
2. John C Calhoun represents what section?
3. Daniel Webster represents what section?
4. What region accepted the Industrial Revolution?
5. What region used KING COTTON?
6. What region did the National ROAD benefit the most?

North

1. FACTORIES
2. LIKED TARRIFS

It protected their business from foreign competition

BECAUSE THE FACTORIES WERE IN THE NORTH, SO


3. WERE THE BANKS.

4. DANIEL WEBSTER

5. HIGH POPULATION

-CITY -
GROWTH/URBANIZATION


6. IMMIGRANTS



SOUTH

1. DID NOT LIKE
TARIFFS BECAUSE THEY
HURT THEIR TRADE.


2. JOHN C. CALHOUN



3. PLANTATIONS


KING COTTON

SLAVERY




WEST

1. ROADS



2. BRIDGES




3. CANALS



4. CHEAP OR FREE LAND

5. HENRY CLAY



6. FAMILY FARMS

